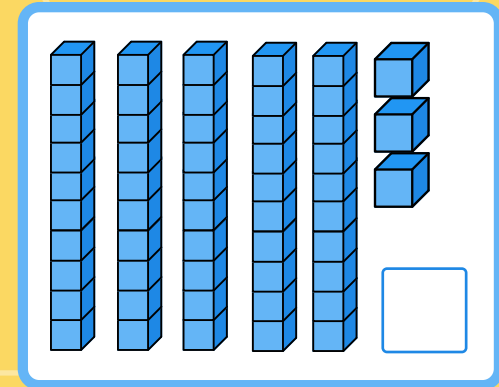
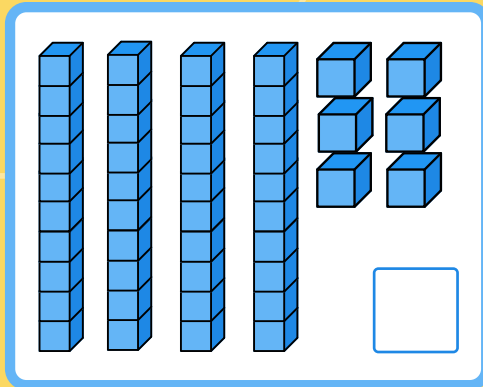

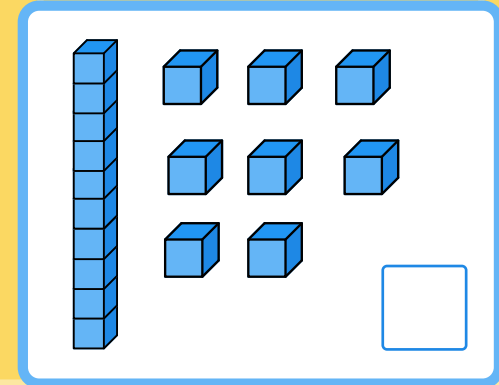
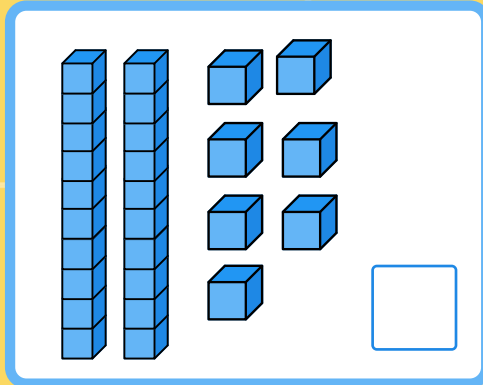
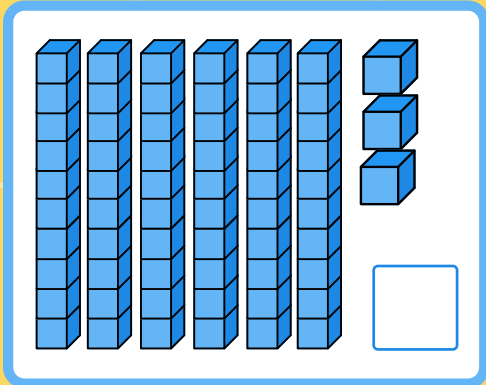
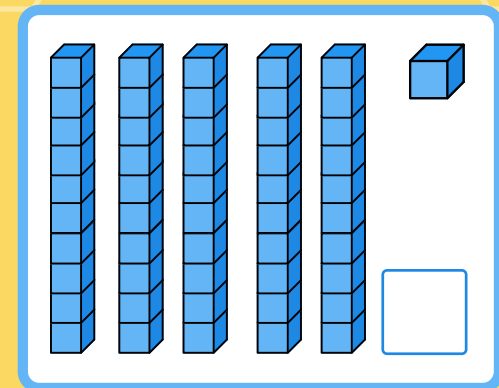
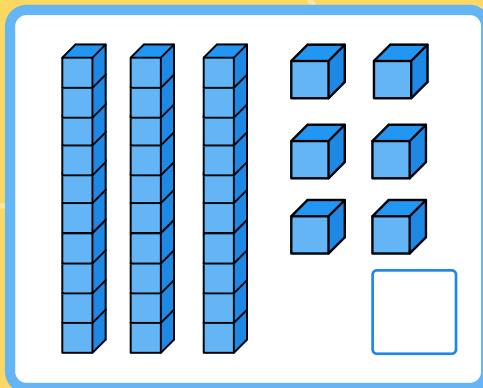
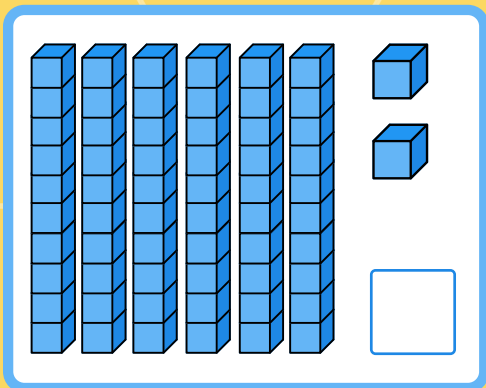
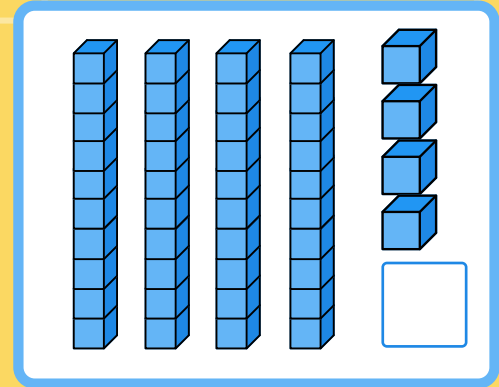
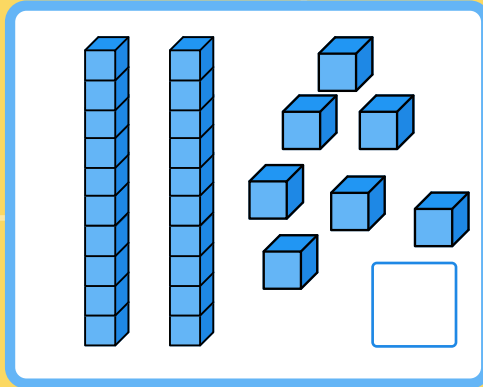
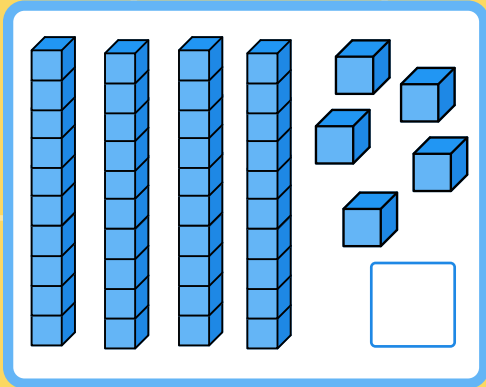


TIENTALLEN EN EENHEDEN TELLEN

Tel de staven van 10 en losse blokjes.
Hoeveel blokjes zijn de tientallen en eenheden samen?




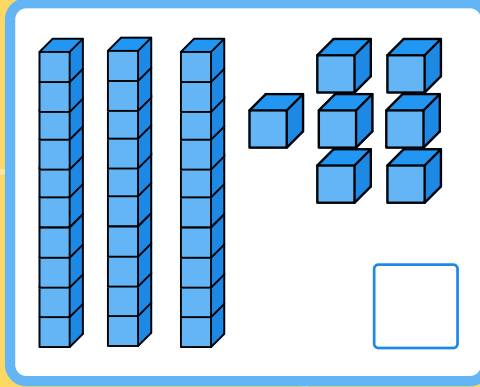

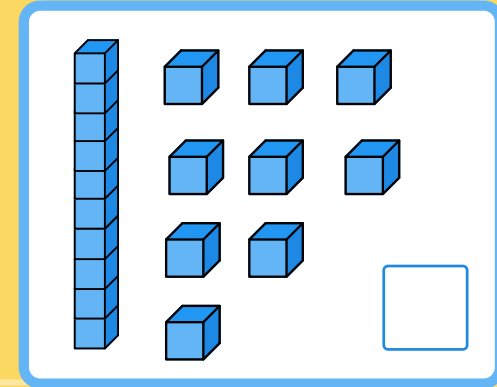
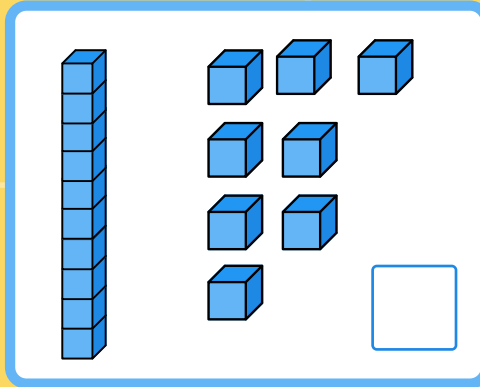
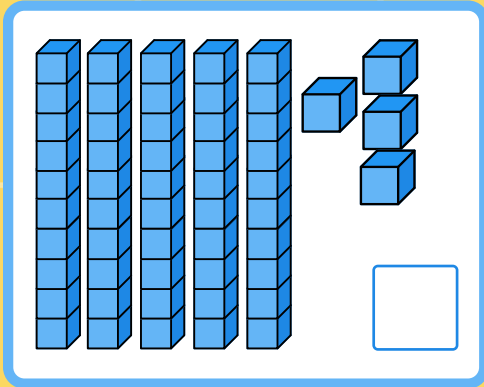
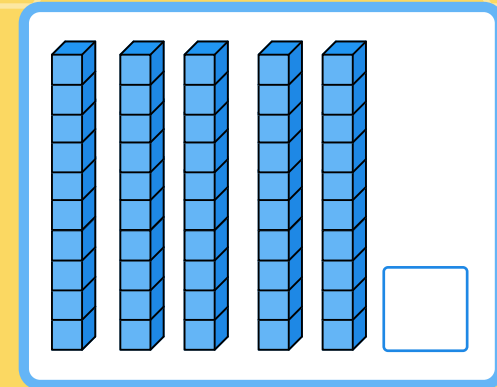
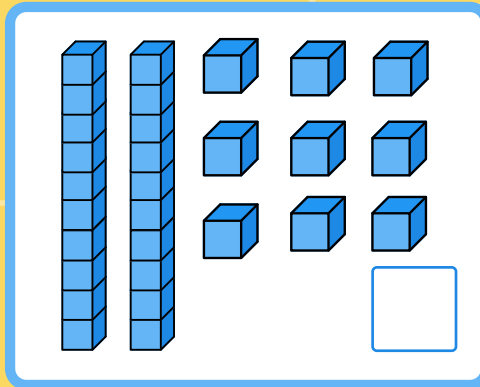
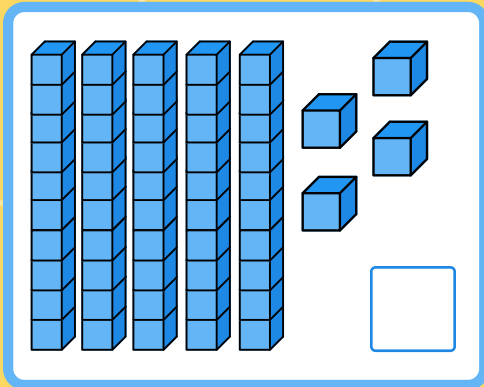
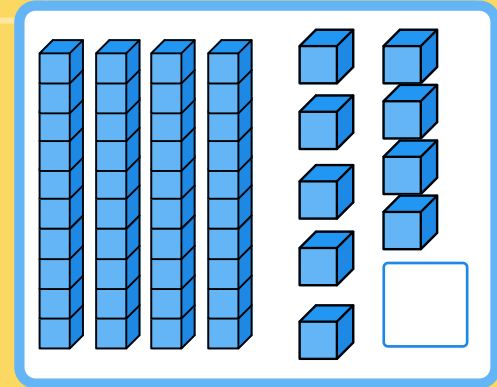
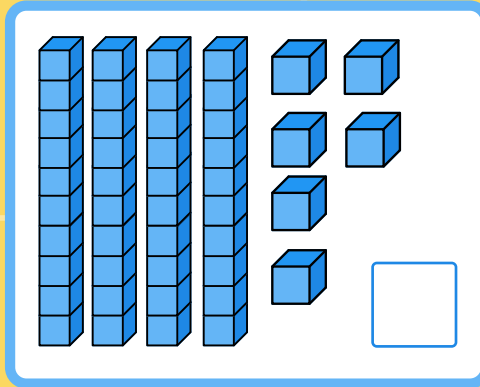
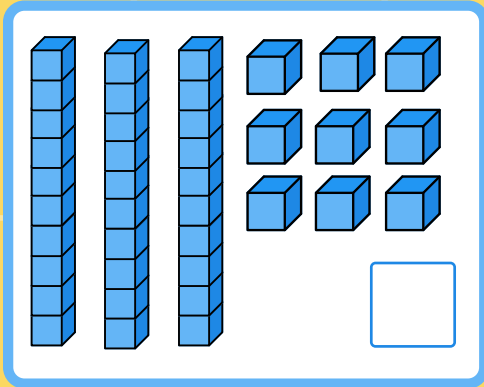
De **tientallen** zijn: 10, 20, 30, 40, 50, 60, 70, 80, 90

De **eenheden** zijn: 1, 2, 3, 4, 5, 6, 7, 8, 9



TIENTALLEN EN EENHEDEN TELLEN

Tel de staven van 10 en losse blokjes.
Hoeveel blokjes zijn de tientallen en eenheden samen?




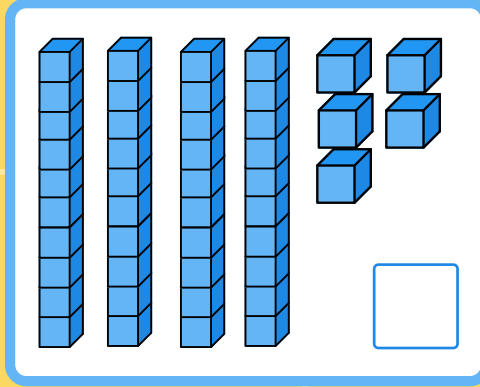
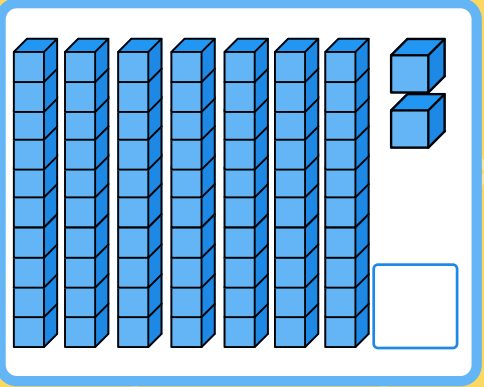
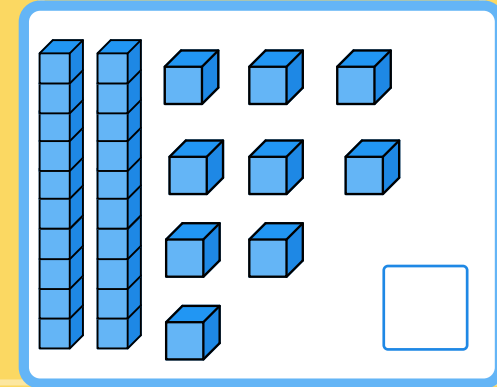
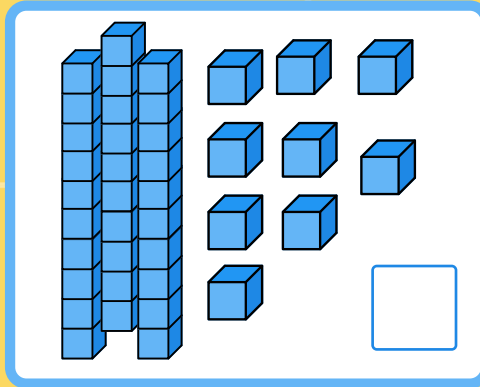
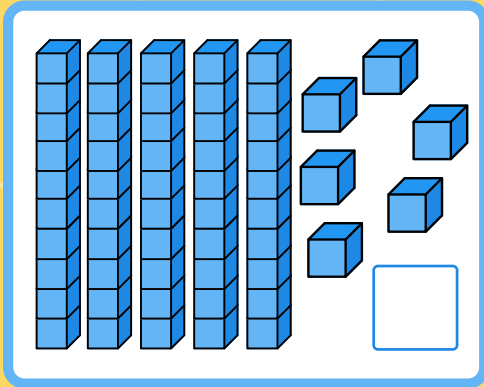
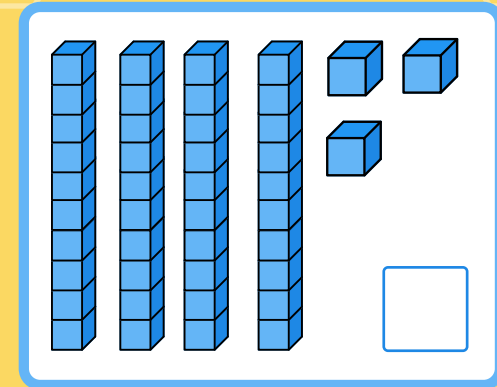
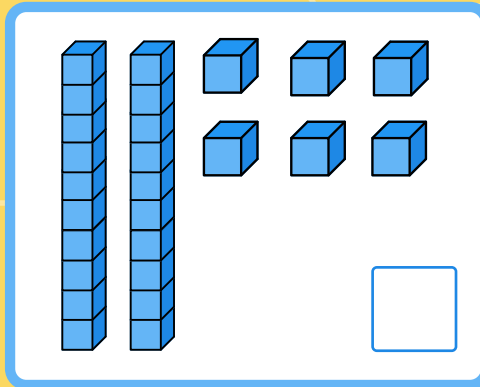

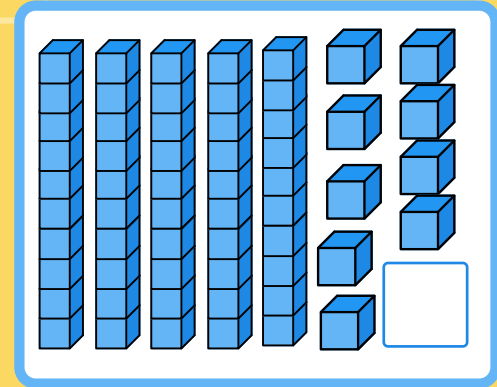
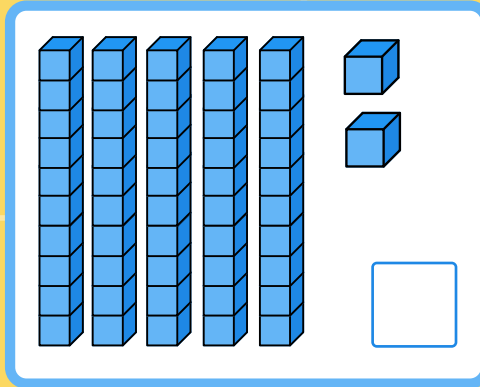
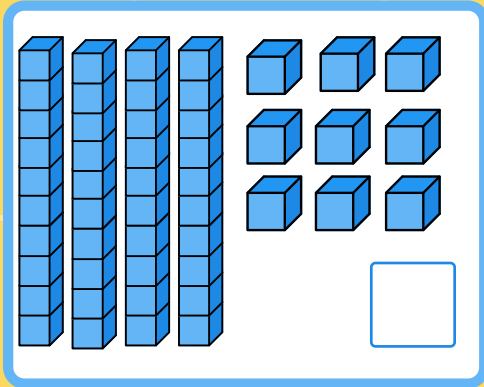
De **tientallen** zijn: 10, 20, 30, 40, 50, 60, 70, 80, 90

De **eenheden** zijn: 1, 2, 3, 4, 5, 6, 7, 8, 9



TIENTALLEN EN EENHEDEN TELLEN

Tel de staven van 10 en losse blokjes.
Hoeveel blokjes zijn de tientallen en eenheden samen?



De **tientallen** zijn: 10, 20, 30, 40, 50, 60, 70, 80, 90

De **eenheden** zijn: 1, 2, 3, 4, 5, 6, 7, 8, 9



TIENTALLEN EN EENHEDEN TELLEN

Tel de biljetten van 10 en losse euromunten.
Hoeveel euro zijn de tientallen en eenheden samen?

10 EURO 10 EURO 10 EURO
10 EURO 10 EURO 10 EURO
10 EURO 10 EURO 10 EURO
10 EURO 10 EURO 10 EURO

2 Euro coins

10 EURO 10 EURO 10 EURO
10 EURO 10 EURO 10 EURO
10 EURO 10 EURO 10 EURO

4 Euro coins

10 EURO 10 EURO 10 EURO
10 EURO 10 EURO 10 EURO
10 EURO 10 EURO 10 EURO

5 Euro coins

10 EURO 10 EURO 10 EURO
10 EURO 10 EURO 10 EURO
10 EURO 10 EURO 10 EURO

6 Euro coins

10 EURO 10 EURO 10 EURO
10 EURO 10 EURO 10 EURO
10 EURO 10 EURO 10 EURO

8 Euro coins

10 EURO 10 EURO 10 EURO
10 EURO 10 EURO 10 EURO
10 EURO 10 EURO 10 EURO

10 Euro coins

10 EURO 10 EURO 10 EURO
10 EURO 10 EURO 10 EURO
10 EURO 10 EURO 10 EURO

12 Euro coins

10 EURO 10 EURO 10 EURO
10 EURO 10 EURO 10 EURO
10 EURO 10 EURO 10 EURO

15 Euro coins

10 EURO 10 EURO 10 EURO
10 EURO 10 EURO 10 EURO
10 EURO 10 EURO 10 EURO

18 Euro coins

10 EURO 10 EURO 10 EURO
10 EURO 10 EURO 10 EURO
10 EURO 10 EURO 10 EURO

20 Euro coins

10 EURO 10 EURO 10 EURO
10 EURO 10 EURO 10 EURO
10 EURO 10 EURO 10 EURO

25 Euro coins

10 EURO 10 EURO 10 EURO
10 EURO 10 EURO 10 EURO
10 EURO 10 EURO 10 EURO

30 Euro coins


De **tientallen** zijn: 10, 20, 30, 40, 50, 60, 70, 80, 90

De **eenheden** zijn: 1, 2, 3, 4, 5, 6, 7, 8, 9




TIENTALLEN EN EENHEDEN TELLEN

Tel de biljetten van 10 en losse euromunten.
Hoeveel euro zijn de tientallen en eenheden samen?



8 ten euro banknotes and 4 one euro coins.




6 ten euro banknotes and 8 one euro coins.




7 ten euro banknotes and 6 one euro coins.



4 ten euro banknotes and 10 one euro coins.



6 ten euro banknotes and 8 one euro coins.




5 ten euro banknotes and 5 one euro coins.



5 ten euro banknotes and 10 one euro coins.




6 ten euro banknotes and 10 one euro coins.




6 ten euro banknotes and 5 one euro coins.



3 ten euro banknotes and 10 one euro coins.



6 ten euro banknotes and 8 one euro coins.



6 ten euro banknotes and 3 one euro coins.


De **tientallen** zijn: 10, 20, 30, 40, 50, 60, 70, 80, 90

De **eenheden** zijn: 1, 2, 3, 4, 5, 6, 7, 8, 9




TIENTALLEN EN EENHEDEN TELLEN

Tel de biljetten van 10 en losse euromunten.
Hoeveel euro zijn de tientallen en eenheden samen?



8 ten Euro banknotes and 4 one Euro coins.




6 ten Euro banknotes and 7 one Euro coins.




8 ten Euro banknotes and 6 one Euro coins.



4 ten Euro banknotes and 10 one Euro coins.



4 ten Euro banknotes and 5 one Euro coins.




5 ten Euro banknotes and 5 one Euro coins.



6 ten Euro banknotes and 7 one Euro coins.



3 ten Euro banknotes and 10 one Euro coins.



5 ten Euro banknotes and 4 one Euro coins.



3 ten Euro banknotes and 9 one Euro coins.



4 ten Euro banknotes and 5 one Euro coins.



5 ten Euro banknotes and 4 one Euro coins.


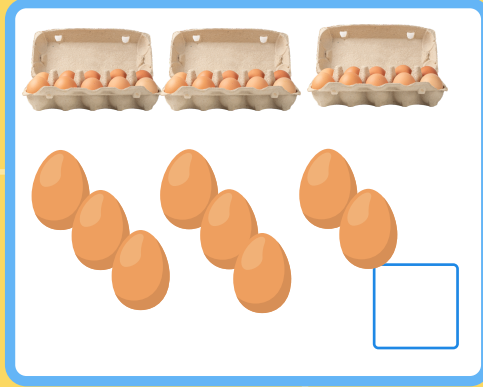








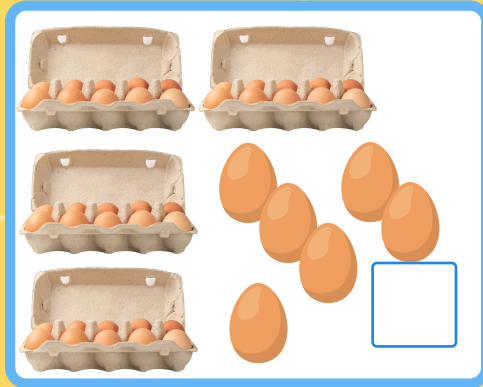

De **tientallen** zijn: 10, 20, 30, 40, 50, 60, 70, 80, 90

De **eenheden** zijn: 1, 2, 3, 4, 5, 6, 7, 8, 9



TIENTALLEN EN EENHEDEN TELLEN

Tel de eierdozen van 10 en losse eieren.
Hoeveel eieren zijn er in totaal?



De **tientallen** zijn: 10, 20, 30, 40, 50, 60, 70, 80, 90

De **eenheden** zijn: 1, 2, 3, 4, 5, 6, 7, 8, 9



TIENTALLEN EN EENHEDEN TELLEN

Tel de eierdozen van 10 en losse eieren.
Hoeveel eieren zijn er in totaal?

□

□

□

□

□

□

□

□

□

□

□

□


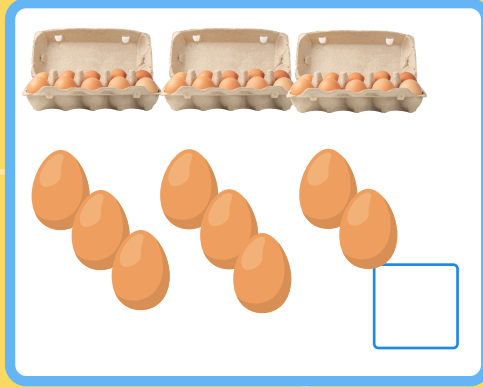








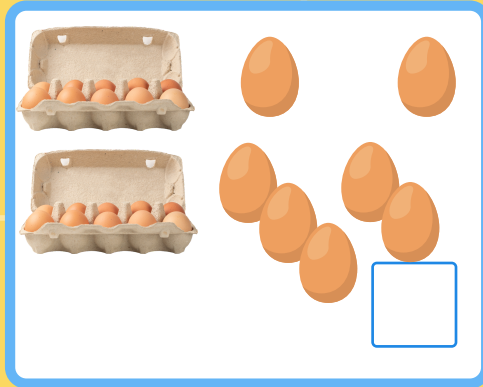
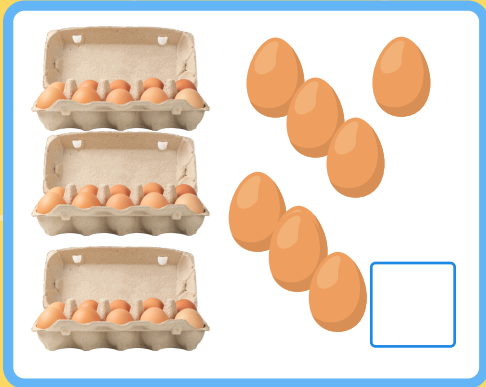
De **tientallen** zijn: 10, 20, 30, 40, 50, 60, 70, 80, 90

De **eenheden** zijn: 1, 2, 3, 4, 5, 6, 7, 8, 9



TIENTALLEN EN EENHEDEN TELLEN

Tel de eierdozen van 10 en losse eieren.
Hoeveel eieren zijn er in totaal?



De **tientallen** zijn: 10, 20, 30, 40, 50, 60, 70, 80, 90

De **eenheden** zijn: 1, 2, 3, 4, 5, 6, 7, 8, 9

