

WWW.JUFJASMIJNOVERONDERWIJS.NL



@JUFJASMIJNOVERONDERWIJS

BUNDEL 5

plus en
minsommen

met
eenheden / tientallen
en overschrijding



$$49 + 21 = 70$$

$$65 - 28 = 37$$

NAAM:

BIJ MIJ GING HET ZO:



OPTELLEN EN AFTREKKEN

tientallen en eenheden met overschijding

OPDRACHT 1. REKEN DE SOM UIT. SCHRIJF HET STARTGETAL OP EN
MAAK SPRONGEN OP DE GETALLENLIJN.

$$35 + 36 =$$



$$45 + 29 =$$



$$67 + 28 =$$



$$27 + 39 =$$



$$36 - 17 =$$



$$56 - 28 =$$



$$76 - 39 =$$



$$72 - 25 =$$



$37 + 26 =$



$37 + 46 =$



$55 + 27 =$



$63 + 19 =$



$67 + 27 =$



$92 - 46 =$



$56 - 28 =$



$51 - 33 =$



$24 - 17 =$



$33 - 15 =$



NAAM:

BIJ MIJ GING HET ZO:

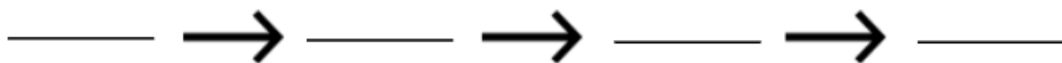
OPTELLEN EN AFTREKKEN



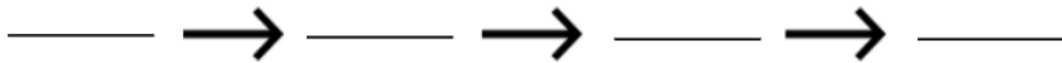
tientallen en eenheden met overschijding

OPDRACHT 1. REKEN DE SOM UIT. SCHRIJF HET STARTGETAL OP EN
MAAK SPRONGEN MET BEHULP VAN PIJLENTAAL.

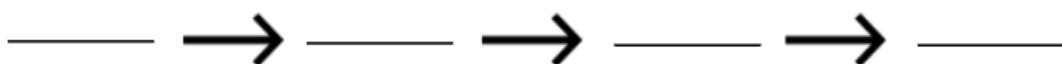
$$35 + 36 =$$



$$45 + 29 =$$



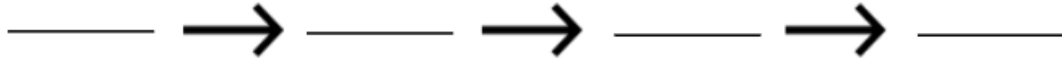
$$67 + 28 =$$



$$27 + 39 =$$



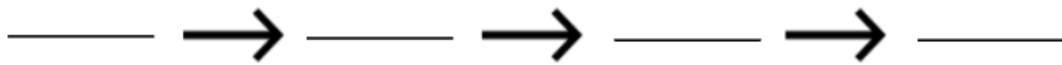
$$36 - 17 =$$



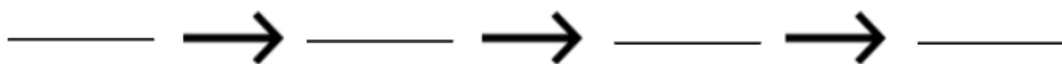
$$56 - 28 =$$



$$76 - 39 =$$



$$72 - 25 =$$



$37 + 26 =$

_____ → _____ → _____ → _____

$37 + 46 =$

_____ → _____ → _____ → _____

$55 + 27 =$

_____ → _____ → _____ → _____

$63 + 19 =$

_____ → _____ → _____ → _____

$67 + 27 =$

_____ → _____ → _____ → _____

$92 - 46 =$

_____ → _____ → _____ → _____

$56 - 28 =$

_____ → _____ → _____ → _____

$51 - 33 =$

_____ → _____ → _____ → _____

$24 - 17 =$

_____ → _____ → _____ → _____

$33 - 15 =$

_____ → _____ → _____ → _____

NAAM:

BIJ MIJ GING HET ZO:

OPTELLEN EN AFTREKKEN



tientallen en eenheden met overschijding

OPDRACHT 1. REKEN DE SOM UIT. SCHRIJF HET STARTGETAL OP EN
MAAK SPRONGEN MET BEHULP VAN HULPSOMMEN.

$$35 + 36 = \quad \square + \square = \square \quad \square + \square = \square \quad \square + \square = \square$$

$$45 + 29 = \quad \square + \square = \square \quad \square + \square = \square \quad \square + \square = \square$$

$$67 + 28 = \quad \square + \square = \square \quad \square + \square = \square \quad \square + \square = \square$$

$$27 + 39 = \quad \square + \square = \square \quad \square + \square = \square \quad \square + \square = \square$$

$$36 - 17 = \quad \square - \square = \square \quad \square - \square = \square \quad \square - \square = \square$$

$$56 - 28 = \quad \square - \square = \square \quad \square - \square = \square \quad \square - \square = \square$$

$$76 - 39 = \quad \square - \square = \square \quad \square - \square = \square \quad \square - \square = \square$$

$$72 - 25 = \quad \square - \square = \square \quad \square - \square = \square \quad \square - \square = \square$$

$37 + 26 =$

$\square + \square = \square$

$\square + \square = \square$

$\square + \square = \square$

$37 + 46 =$

$\square + \square = \square$

$\square + \square = \square$

$\square + \square = \square$

$55 + 27 =$

$\square + \square = \square$

$\square + \square = \square$

$\square + \square = \square$

$63 + 19 =$

$\square + \square = \square$

$\square + \square = \square$

$\square + \square = \square$

$67 + 27 =$

$\square + \square = \square$

$\square + \square = \square$

$\square + \square = \square$

$92 - 46 =$

$\square - \square = \square$

$\square - \square = \square$

$\square - \square = \square$

$56 - 28 =$

$\square - \square = \square$

$\square - \square = \square$

$\square - \square = \square$

$51 - 33 =$

$\square - \square = \square$

$\square - \square = \square$

$\square - \square = \square$

$24 - 17 =$

$\square - \square = \square$

$\square - \square = \square$

$\square - \square = \square$

$33 - 15 =$

$\square - \square = \square$

$\square - \square = \square$

$\square - \square = \square$

NAAM:

BIJ MIJ GING HET ZO:

OPTELLEN EN AFTREKKEN



tientallen en eenheden met overschijding

OPDRACHT 1. REKEN DE SOM UIT. SCHRIJF HET STARTGETAL OP EN
MAAK SPRONGEN MET BEHULP VAN HULPSOMMEN.

$$35 + 38 = \quad \square + \square = \square \quad \square + \square = \square \quad \square + \square = \square$$

$$55 + 26 = \quad \square + \square = \square \quad \square + \square = \square \quad \square + \square = \square$$

$$27 + 27 = \quad \square + \square = \square \quad \square + \square = \square \quad \square + \square = \square$$

$$17 + 68 = \quad \square + \square = \square \quad \square + \square = \square \quad \square + \square = \square$$

$$56 - 17 = \quad \square - \square = \square \quad \square - \square = \square \quad \square - \square = \square$$

$$52 - 18 = \quad \square - \square = \square \quad \square - \square = \square \quad \square - \square = \square$$

$$36 - 19 = \quad \square - \square = \square \quad \square - \square = \square \quad \square - \square = \square$$

$$92 - 56 = \quad \square - \square = \square \quad \square - \square = \square \quad \square - \square = \square$$

BIJ MIJ GING HET ZO:

OPTELLEN EN AFTREKKEN



tientallen en eenheden met overschijding

OPDRACHT 2. REKEN DE SOM UIT. MAAK GEBRUIK VAN DE STRATEGIE ALS JE DAT NODIG HEBT. GEBRUIK DAN JOUW KLADBLOK.

$$55 + 28 = \underline{\hspace{2cm}}$$

$$59 + 24 = \underline{\hspace{2cm}}$$

$$28 + 14 = \underline{\hspace{2cm}}$$

$$25 + 37 = \underline{\hspace{2cm}}$$

$$58 + 25 = \underline{\hspace{2cm}}$$

$$77 + 15 = \underline{\hspace{2cm}}$$

$$17 + 38 = \underline{\hspace{2cm}}$$

$$19 + 46 = \underline{\hspace{2cm}}$$

$$27 + 54 = \underline{\hspace{2cm}}$$

$$63 - 16 = \underline{\hspace{2cm}}$$

$$43 - 15 = \underline{\hspace{2cm}}$$

$$69 - 27 = \underline{\hspace{2cm}}$$

$$88 - 29 = \underline{\hspace{2cm}}$$

$$81 - 48 = \underline{\hspace{2cm}}$$

$$67 - 36 = \underline{\hspace{2cm}}$$

$$91 - 52 = \underline{\hspace{2cm}}$$

$$73 - 27 = \underline{\hspace{2cm}}$$

$$75 - 39 = \underline{\hspace{2cm}}$$

$$63 - 34 = \underline{\hspace{2cm}}$$

$$45 + 26 = \underline{\hspace{2cm}}$$

$$94 - 48 = \underline{\hspace{2cm}}$$

$$18 + 38 = \underline{\hspace{2cm}}$$

$$25 + 16 = \underline{\hspace{2cm}}$$

$$21 - 17 = \underline{\hspace{2cm}}$$

$$45 + 28 = \underline{\hspace{2cm}}$$

$$34 - 16 = \underline{\hspace{2cm}}$$

$$42 - 26 = \underline{\hspace{2cm}}$$

NAAM:

$$\square + \underset{\wedge}{\square} =$$

$$\square + \underset{\wedge}{\square} =$$

$$\square + \underset{\wedge}{\square} =$$

$$\square + \underset{\wedge}{\square} =$$

$$\square + \underset{\wedge}{\square} =$$

$$\square - \underset{\wedge}{\square} =$$

$$\square - \underset{\wedge}{\square} =$$

$$\square - \underset{\wedge}{\square} =$$

$$\square - \underset{\wedge}{\square} =$$

$$\square - \underset{\wedge}{\square} =$$

NAAM:

$$\square + \underset{\wedge}{\square} =$$

$$\square + \underset{\wedge}{\square} =$$

$$\square + \underset{\wedge}{\square} =$$

$$\square + \underset{\wedge}{\square} =$$

$$\square + \underset{\wedge}{\square} =$$

$$\square - \underset{\wedge}{\square} =$$

$$\square - \underset{\wedge}{\square} =$$

$$\square - \underset{\wedge}{\square} =$$

$$\square - \underset{\wedge}{\square} =$$

$$\square - \underset{\wedge}{\square} =$$

NAAM:

$$\square + \square =$$

_____ → _____ → _____ → _____

$$\square + \square =$$

_____ → _____ → _____ → _____

$$\square + \square =$$

_____ → _____ → _____ → _____

$$\square + \square =$$

_____ → _____ → _____ → _____

$$\square + \square =$$

_____ → _____ → _____ → _____

$$\square - \square =$$

_____ → _____ → _____ → _____

$$\square - \square =$$

_____ → _____ → _____ → _____

$$\square - \square =$$

_____ → _____ → _____ → _____

$$\square - \square =$$

_____ → _____ → _____ → _____

$$\square - \square =$$

_____ → _____ → _____ → _____

NAAM:

$$\square + \underset{\wedge}{\square} =$$

_____ → _____ → _____ → _____

$$\square + \underset{\wedge}{\square} =$$

_____ → _____ → _____ → _____

$$\square + \underset{\wedge}{\square} =$$

_____ → _____ → _____ → _____

$$\square + \underset{\wedge}{\square} =$$

_____ → _____ → _____ → _____

$$\square + \underset{\wedge}{\square} =$$

_____ → _____ → _____ → _____

$$\square - \underset{\wedge}{\square} =$$

_____ → _____ → _____ → _____

$$\square - \underset{\wedge}{\square} =$$

_____ → _____ → _____ → _____

$$\square - \underset{\wedge}{\square} =$$

_____ → _____ → _____ → _____

$$\square - \underset{\wedge}{\square} =$$

_____ → _____ → _____ → _____

$$\square - \underset{\wedge}{\square} =$$

_____ → _____ → _____ → _____

NAAM:

$$\square + \square = \square \quad \square + \square = \square \quad \square + \square = \square \quad \square + \square = \square$$

$$\square + \square = \square \quad \square + \square = \square \quad \square + \square = \square \quad \square + \square = \square$$

$$\square + \square = \square \quad \square + \square = \square \quad \square + \square = \square \quad \square + \square = \square$$

$$\square + \square = \square \quad \square + \square = \square \quad \square + \square = \square \quad \square + \square = \square$$

$$\square + \square = \square \quad \square + \square = \square \quad \square + \square = \square \quad \square + \square = \square$$

$$\square - \square = \square \quad \square - \square = \square \quad \square - \square = \square \quad \square - \square = \square$$

$$\square - \square = \square \quad \square - \square = \square \quad \square - \square = \square \quad \square - \square = \square$$

$$\square - \square = \square \quad \square - \square = \square \quad \square - \square = \square \quad \square - \square = \square$$

$$\square - \square = \square \quad \square - \square = \square \quad \square - \square = \square \quad \square - \square = \square$$

$$\square - \square = \square \quad \square - \square = \square \quad \square - \square = \square \quad \square - \square = \square$$

NAAM:

$$\square + \square =$$

$$\square + \square =$$

$$\square + \square =$$

$$\square + \square =$$

$$\square + \square =$$

$$\square - \square =$$

$$\square - \square =$$

$$\square - \square =$$

$$\square - \square =$$

$$\square - \square =$$

NAAM:

$$\square + \square =$$

$$\square + \square =$$

$$\square + \square =$$

$$\square + \square =$$

$$\square + \square =$$

$$\square - \square =$$

$$\square - \square =$$

$$\square - \square =$$

$$\square - \square =$$

$$\square - \square =$$

NAAM:

$$\square + \square =$$

$$\square + \square =$$

$$\square + \square =$$

$$\square + \square =$$

$$\square + \square =$$

$$\square - \square =$$

$$\square - \square =$$

$$\square - \square =$$

$$\square - \square =$$

$$\square - \square =$$