

WWW.JUFJASMIJNOVERONDERWIJS.NL



@JUFJASMIJNOVERONDERWIJS

BUNDEL 2

plus en
minsommen

met overschrijding
van het tweede
tiental

$$19 + 1 = 26$$

$$25 - 8 = 17$$



NAAM:

BIJ MIJ GING HET ZO:

OPTELLEN EN AFTREKKEN



op de getallenlijn

OPDRACHT 1. REKEN DE SOM UIT. SCHRIJF HET STARTGETAL OP EN
MAAK SPRONGEN OP DE GETALLENLIJN.

$$13 + 9 =$$



$$14 + 8 =$$



$$15 + 9 =$$



$$16 + 8 =$$



$$21 - 7 =$$



$$24 - 8 =$$



$$23 - 6 =$$



$$25 - 9 =$$



$18 + 7 =$



$17 + 7 =$



$14 + 9 =$



$17 + 6 =$



$19 + 8 =$



$27 - 8 =$




$22 - 8 =$



$27 - 9 =$



$26 - 9 =$



$23 - 7 =$



NAAM:

BIJ MIJ GING HET ZO:

OPTELLEN EN AFTREKKEN

met pijlentaal



OPDRACHT 1. REKEN DE SOM UIT. SCHRIJF HET STARTGETAL OP EN
MAAK SPRONGEN OP DE GETALLENLIJN. DAARNA MET PIJLENTAAL.

$$15 + 9 =$$



$$15 + 9 =$$



$$17 + 7 =$$



$$17 + 7 =$$



$$26 - 8 =$$



$$26 - 8 =$$



$$22 - 5 =$$



$$22 - 5 =$$



$17 + 6 =$

$17 + 6 =$

_____ → _____ → _____
STARTGETAL TIENTAL ANTWOORD

$15 + 7 =$

_____ → _____ → _____
STARTGETAL TIENTAL ANTWOORD

$13 + 9 =$

_____ → _____ → _____
STARTGETAL TIENTAL ANTWOORD

$17 + 7 =$

_____ → _____ → _____
STARTGETAL TIENTAL ANTWOORD

$22 - 6 =$

$22 - 6 =$

_____ → _____ → _____
STARTGETAL TIENTAL ANTWOORD

$21 - 3 =$

_____ → _____ → _____
STARTGETAL TIENTAL ANTWOORD

$24 - 7 =$

_____ → _____ → _____
STARTGETAL TIENTAL ANTWOORD

$23 - 5 =$

_____ → _____ → _____
STARTGETAL TIENTAL ANTWOORD

NAAM:

BIJ MIJ GING HET ZO:

OPTELLEN EN AFTREKKEN

met pijlentaal



OPDRACHT 1. REKEN DE SOM UIT. MAAK GEBRUIK VAN PIJLENTAAL OM TOT HET ANTWOORD TE KOMEN.

$$13 + 9 =$$



$$14 + 8 =$$



$$15 + 9 =$$



$$16 + 8 =$$



$$21 - 7 =$$



$$24 - 8 =$$



$$23 - 6 =$$



$$25 - 9 =$$



$18 + 7 =$
^

_____ → _____ → _____
STARTGETAL TIENTAL ANTWOORD

$17 + 7 =$
^

_____ → _____ → _____
STARTGETAL TIENTAL ANTWOORD

$14 + 9 =$
^

_____ → _____ → _____
STARTGETAL TIENTAL ANTWOORD

$17 + 6 =$
^

_____ → _____ → _____
STARTGETAL TIENTAL ANTWOORD

$19 + 8 =$
^

_____ → _____ → _____
STARTGETAL TIENTAL ANTWOORD

$21 - 8 =$
^

_____ → _____ → _____
STARTGETAL TIENTAL ANTWOORD

$22 - 8 =$
^

_____ → _____ → _____
STARTGETAL TIENTAL ANTWOORD

$27 - 9 =$
^

_____ → _____ → _____
STARTGETAL TIENTAL ANTWOORD

$26 - 7 =$
^

_____ → _____ → _____
STARTGETAL TIENTAL ANTWOORD

$23 - 7 =$
^

_____ → _____ → _____
STARTGETAL TIENTAL ANTWOORD

NAAM:

BIJ MIJ GING HET ZO:

OPTELLEN EN AFTREKKEN

met pijlentaal 

OPDRACHT 1. REKEN DE SOM UIT. MAAK GEBRUIK VAN PIJLENTAAL OM TOT HET ANTWOORD TE KOMEN.


$16 + 7 =$

^




$19 + 3 =$

^



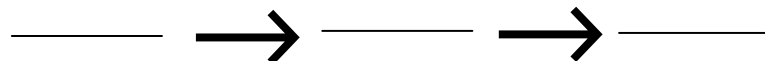
$17 + 6 =$

^



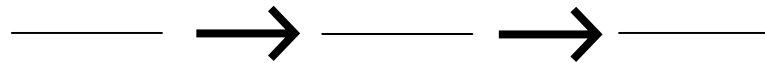
$16 + 9 =$

^



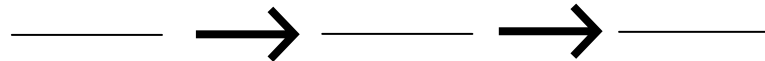
$23 - 4 =$

^




$25 - 8 =$

^




$26 - 8 =$

^



$21 - 6 =$

^



$19 + 7 =$
^

_____ → _____ → _____

$17 + 6 =$
^

_____ → _____ → _____

$17 + 5 =$
^

_____ → _____ → _____

$19 + 9 =$
^

_____ → _____ → _____

$17 + 4 =$
^

_____ → _____ → _____

$25 - 6 =$
^

_____ → _____ → _____

$23 - 8 =$
^

_____ → _____ → _____

$21 - 7 =$
^

_____ → _____ → _____

$24 - 5 =$
^

_____ → _____ → _____

$22 - 5 =$
^

_____ → _____ → _____

NAAM:

BIJ MIJ GING HET ZO:

OPTELLEN EN AFTREKKEN



met hulpsommen

OPDRACHT 1. REKEN DE SOM UIT. REKEN DE HULPSOMMEN UIT OM TOT HET ANTWOORD TE KOMEN.

$$13 + 9 =$$

$$\square + \square = \square$$

$$\square + \square = \square$$

$$14 + 8 =$$

$$\square + \square = \square$$

$$\square + \square = \square$$

$$15 + 9 =$$

$$\square + \square = \square$$

$$\square + \square = \square$$

$$16 + 8 =$$

$$\square + \square = \square$$

$$\square + \square = \square$$

$$21 - 7 =$$

$$\square - \square = \square$$

$$\square - \square = \square$$

$$24 - 8 =$$

$$\square - \square = \square$$

$$\square - \square = \square$$

$$23 - 6 =$$

$$\square - \square = \square$$

$$\square - \square = \square$$

$$25 - 9 =$$

$$\square - \square = \square$$

$$\square - \square = \square$$

$19 + 7 =$

$\square + \square = \square$

$\square + \square = \square$

$17 + 6 =$

$\square + \square = \square$

$\square + \square = \square$

$17 + 5 =$

$\square + \square = \square$

$\square + \square = \square$

$19 + 9 =$

$\square + \square = \square$

$\square + \square = \square$

$17 + 4 =$

$\square + \square = \square$

$\square + \square = \square$

$25 - 6 =$

$\square - \square = \square$

$\square - \square = \square$

$23 - 8 =$

$\square - \square = \square$

$\square - \square = \square$

$21 - 7 =$

$\square - \square = \square$

$\square - \square = \square$

$24 - 5 =$

$\square - \square = \square$

$\square - \square = \square$

$22 - 5 =$

$\square - \square = \square$

$\square - \square = \square$

NAAM:

BIJ MIJ GING HET ZO:

OPTELEN EN AFTREKKEN



met hulpsommen

OPDRACHT 1. REKEN DE SOM UIT. REKEN DE HULPSOMMEN UIT OM TOT HET ANTWOORD TE KOMEN.

$$15 + 9 =$$



$$\square + \square = \square$$

$$\square + \square = \square$$

$$14 + 6 =$$



$$\square + \square = \square$$

$$\square + \square = \square$$

$$15 + 6 =$$



$$\square + \square = \square$$

$$\square + \square = \square$$

$$16 + 7 =$$



$$\square + \square = \square$$

$$\square + \square = \square$$

$$21 - 5 =$$



$$\square - \square = \square$$

$$\square - \square = \square$$

$$24 - 9 =$$



$$\square - \square = \square$$

$$\square - \square = \square$$

$$22 - 6 =$$



$$\square - \square = \square$$

$$\square - \square = \square$$

$$21 - 9 =$$



$$\square - \square = \square$$

$$\square - \square = \square$$

BIJ MIJ GING HET ZO:

OPTELLEN EN AFTREKKEN

uit het hoofd 

OPDRACHT 2. REKEN DE SOM UIT. PROBEER HET UIT JOUW HOOFD. HEB JE DE HULPSOM NOG NODIG? GEBRUIK DAN JOUW KLADBLOK.

$$15 + 8 = \underline{\quad}$$

$$19 + 4 = \underline{\quad}$$

$$18 + 4 = \underline{\quad}$$

$$15 + 7 = \underline{\quad}$$

$$18 + 5 = \underline{\quad}$$

$$17 + 5 = \underline{\quad}$$

$$17 + 8 = \underline{\quad}$$

$$19 + 6 = \underline{\quad}$$

$$17 + 4 = \underline{\quad}$$

$$23 - 6 = \underline{\quad}$$

$$23 - 5 = \underline{\quad}$$

$$22 - 7 = \underline{\quad}$$

$$28 - 9 = \underline{\quad}$$

$$21 - 8 = \underline{\quad}$$

$$27 - 9 = \underline{\quad}$$

$$21 - 2 = \underline{\quad}$$

$$23 - 7 = \underline{\quad}$$

$$25 - 9 = \underline{\quad}$$

$$23 - 4 = \underline{\quad}$$

$$15 + 6 = \underline{\quad}$$

$$24 - 8 = \underline{\quad}$$

$$18 + 8 = \underline{\quad}$$

$$15 + 6 = \underline{\quad}$$

$$21 - 7 = \underline{\quad}$$

$$15 + 8 = \underline{\quad}$$

$$24 - 6 = \underline{\quad}$$

$$22 - 6 = \underline{\quad}$$

NAAM:

$$\square + \underset{\wedge}{\square} =$$

$$\square + \underset{\wedge}{\square} =$$

$$\square + \underset{\wedge}{\square} =$$

$$\square + \underset{\wedge}{\square} =$$

$$\square + \underset{\wedge}{\square} =$$

$$\square - \underset{\wedge}{\square} =$$

$$\square - \underset{\wedge}{\square} =$$

$$\square - \underset{\wedge}{\square} =$$

$$\square - \underset{\wedge}{\square} =$$

$$\square - \underset{\wedge}{\square} =$$

NAAM:

$$\square + \underset{\wedge}{\square} =$$

$$\square + \underset{\wedge}{\square} =$$

$$\square + \underset{\wedge}{\square} =$$

$$\square + \underset{\wedge}{\square} =$$

$$\square + \underset{\wedge}{\square} =$$

$$\square - \underset{\wedge}{\square} =$$

$$\square - \underset{\wedge}{\square} =$$

$$\square - \underset{\wedge}{\square} =$$

$$\square - \underset{\wedge}{\square} =$$

$$\square - \underset{\wedge}{\square} =$$

NAAM:

$$\square + \underset{\wedge}{\square} =$$

_____ → _____ → _____

$$\square + \underset{\wedge}{\square} =$$

_____ → _____ → _____

$$\square + \underset{\wedge}{\square} =$$

_____ → _____ → _____

$$\square + \underset{\wedge}{\square} =$$

_____ → _____ → _____

$$\square + \underset{\wedge}{\square} =$$

_____ → _____ → _____

$$\square - \underset{\wedge}{\square} =$$

_____ → _____ → _____

$$\square - \underset{\wedge}{\square} =$$

_____ → _____ → _____

$$\square - \underset{\wedge}{\square} =$$

_____ → _____ → _____

$$\square - \underset{\wedge}{\square} =$$

_____ → _____ → _____

$$\square - \underset{\wedge}{\square} =$$

_____ → _____ → _____

NAAM:

$$\square + \underset{\wedge}{\square} =$$

_____ → _____ → _____

$$\square + \underset{\wedge}{\square} =$$

_____ → _____ → _____

$$\square + \underset{\wedge}{\square} =$$

_____ → _____ → _____

$$\square + \underset{\wedge}{\square} =$$

_____ → _____ → _____

$$\square + \underset{\wedge}{\square} =$$

_____ → _____ → _____

$$\square - \underset{\wedge}{\square} =$$

_____ → _____ → _____

$$\square - \underset{\wedge}{\square} =$$

_____ → _____ → _____

$$\square - \underset{\wedge}{\square} =$$

_____ → _____ → _____

$$\square - \underset{\wedge}{\square} =$$

_____ → _____ → _____

$$\square - \underset{\wedge}{\square} =$$

_____ → _____ → _____

NAAM:

$$\square + \underset{\wedge}{\square} =$$

$$\square + \square = \square$$

$$\square + \square = \square$$

$$\square + \underset{\wedge}{\square} =$$

$$\square + \square = \square$$

$$\square + \square = \square$$

$$\square + \underset{\wedge}{\square} =$$

$$\square + \square = \square$$

$$\square + \square = \square$$

$$\square + \underset{\wedge}{\square} =$$

$$\square + \square = \square$$

$$\square + \square = \square$$

$$\square + \underset{\wedge}{\square} =$$

$$\square + \square = \square$$

$$\square + \square = \square$$

$$\square - \underset{\wedge}{\square} =$$

$$\square - \square = \square$$

$$\square - \square = \square$$

$$\square - \underset{\wedge}{\square} =$$

$$\square - \square = \square$$

$$\square - \square = \square$$

$$\square - \underset{\wedge}{\square} =$$

$$\square - \square = \square$$

$$\square - \square = \square$$

$$\square - \underset{\wedge}{\square} =$$

$$\square - \square = \square$$

$$\square - \square = \square$$

$$\square - \underset{\wedge}{\square} =$$

$$\square - \square = \square$$

$$\square - \square = \square$$

NAAM:

$$\square + \underset{\wedge}{\square} =$$

$$\square + \square = \square$$

$$\square + \square = \square$$

$$\square + \underset{\wedge}{\square} =$$

$$\square + \square = \square$$

$$\square + \square = \square$$

$$\square + \underset{\wedge}{\square} =$$

$$\square + \square = \square$$

$$\square + \square = \square$$

$$\square + \underset{\wedge}{\square} =$$

$$\square + \square = \square$$

$$\square + \square = \square$$

$$\square + \underset{\wedge}{\square} =$$

$$\square + \square = \square$$

$$\square + \square = \square$$

$$\square - \underset{\wedge}{\square} =$$

$$\square - \square = \square$$

$$\square - \square = \square$$

$$\square - \underset{\wedge}{\square} =$$

$$\square - \square = \square$$

$$\square - \square = \square$$

$$\square - \underset{\wedge}{\square} =$$

$$\square - \square = \square$$

$$\square - \square = \square$$

$$\square - \underset{\wedge}{\square} =$$

$$\square - \square = \square$$

$$\square - \square = \square$$

$$\square - \underset{\wedge}{\square} =$$

$$\square - \square = \square$$

$$\square - \square = \square$$

NAAM:

$$\square + \underset{\wedge}{\square} =$$

$$\square + \underset{\wedge}{\square} =$$

$$\square + \underset{\wedge}{\square} =$$

$$\square + \underset{\wedge}{\square} =$$

$$\square + \underset{\wedge}{\square} =$$

$$\square - \underset{\wedge}{\square} =$$

$$\square - \underset{\wedge}{\square} =$$

$$\square - \underset{\wedge}{\square} =$$

$$\square - \underset{\wedge}{\square} =$$

$$\square - \underset{\wedge}{\square} =$$

NAAM:

$$\square + \underset{\wedge}{\square} =$$

$$\square + \underset{\wedge}{\square} =$$

$$\square + \underset{\wedge}{\square} =$$

$$\square + \underset{\wedge}{\square} =$$

$$\square + \underset{\wedge}{\square} =$$

$$\square - \underset{\wedge}{\square} =$$

$$\square - \underset{\wedge}{\square} =$$

$$\square - \underset{\wedge}{\square} =$$

$$\square - \underset{\wedge}{\square} =$$

$$\square - \underset{\wedge}{\square} =$$